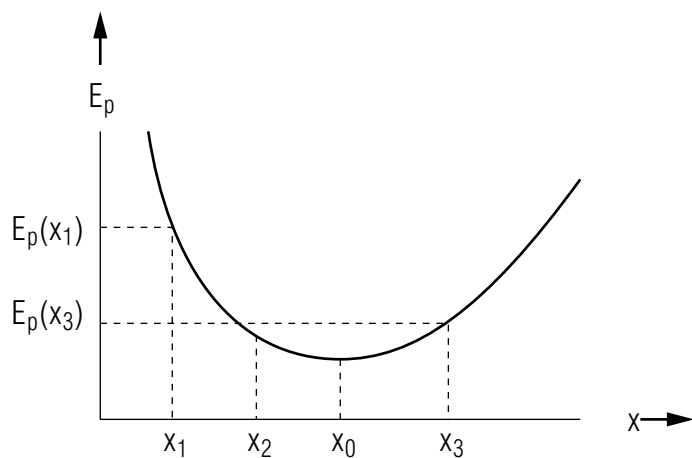


## POTENTIAL ENERGY CURVES, MOTION, TURNING POINTS



## POTENTIAL ENERGY CURVES, MOTION, TURNING POINTS

by

J. S. Kovacs and P. Signell

### 1. Introduction

- a. Using Potential Energy Instead of Force ..... 1
- b. What One Can Learn From Potential Energy ..... 1

### 2. $F(x)$ , $v(x)$ , and $a(x)$ from $E_p(x)$

- a.  $F(x)$  from Slope of  $E_p(x)$  ..... 1
- b.  $a(x)$  from Slope of  $E_p(x)$  ..... 2
- c.  $v(x)$  from Conservation of Energy ..... 3

### 3. Deductions From Graphical $E_p(x)$

- a. Energy Diagrams ..... 3
- b. Changes in Speed ..... 4
- c. Turning Points ..... 4

### 4. Dealing with $E_p(x)$ ..... 5

### Acknowledgments ..... 5

### Glossary ..... 6

Title: **Potential Energy Curves, Motion, Turning Points**

Author: J. S. Kovacs and P. Signell, Michigan State University

Version: 2/1/2000

Evaluation: Stage 0

Length: 1 hr; 16 pages

**Input Skills:**

1. Given the graph of a function, estimate the slope of the function at any given point.
2. State the law of conservation of energy for mechanical systems, defining kinetic and potential energy (MISN-0-415).

**Output Skills (Knowledge):**

- K1. Vocabulary: potential energy curve, energy diagram, left and right turning points.

**Output Skills (Problem Solving):**

- S1. Given the graph of a one-dimensional potential energy function and the total energy of a particle, give a qualitative description of the motion of this particle and locate its turning points, if any, and regions of acceleration and deceleration.
- S2. Given a simple potential energy function for a particle, and the corresponding slope function (in one dimension or radially with spherical symmetry), sketch the function, determine the left and right turning points (if any) of the motion and, for any given position, the force acting on the particle and its acceleration and velocity.

THIS IS A DEVELOPMENTAL-STAGE PUBLICATION  
OF PROJECT PHYSNET

The goal of our project is to assist a network of educators and scientists in transferring physics from one person to another. We support manuscript processing and distribution, along with communication and information systems. We also work with employers to identify basic scientific skills as well as physics topics that are needed in science and technology. A number of our publications are aimed at assisting users in acquiring such skills.

Our publications are designed: (i) to be updated quickly in response to field tests and new scientific developments; (ii) to be used in both classroom and professional settings; (iii) to show the prerequisite dependencies existing among the various chunks of physics knowledge and skill, as a guide both to mental organization and to use of the materials; and (iv) to be adapted quickly to specific user needs ranging from single-skill instruction to complete custom textbooks.

New authors, reviewers and field testers are welcome.

PROJECT STAFF

Andrew Schnepf	Webmaster
Eugene Kales	Graphics
Peter Signell	Project Director

ADVISORY COMMITTEE

D. Alan Bromley	Yale University
E. Leonard Jossem	The Ohio State University
A. A. Strassenburg	S. U. N. Y., Stony Brook

Views expressed in a module are those of the module author(s) and are not necessarily those of other project participants.

© 2001, Peter Signell for Project PHYSNET, Physics-Astronomy Bldg., Mich. State Univ., E. Lansing, MI 48824; (517) 355-3784. For our liberal use policies see:

<http://www.physnet.org/home/modules/license.html>.

# POTENTIAL ENERGY CURVES, MOTION, TURNING POINTS

by

J. S. Kovacs and P. Signell

## 1. Introduction

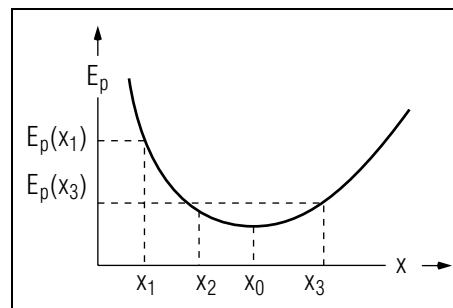
**1a. Using Potential Energy Instead of Force .** In many applications an object's "potential energy" is a more useful dynamical quantity than is the "force" being exerted on the object. In fact, for the quantum world of atoms and molecules the concept of force does not exist and the potential energy function replaces it as the prime quantity of interest. In this module we will work with you on understanding how one uses the potential energy function to deduce motion in classical physics. That means we will illustrate its use with cases where force is also a good concept so you will be able to make a smooth transition in understanding.

**1b. What One Can Learn From Potential Energy .** If a particle's potential energy graph and its total energy are known, then all dynamical quantities of the particle can be found.<sup>1</sup> For example, from an object's potential energy graph, and the value of its total energy, one can find the force acting on the particle, the particle's acceleration, its velocity and its kinetic energy at any point in space. In this module we show you how to deduce such quantities from a potential energy graph and total energy value. We will restrict ourselves to problems that involve only one coordinate, which means either one-dimensional problems or three-dimensional ones that have spherical symmetry. For the case of spherical symmetry, the single coordinate,  $r$ , the distance of the particle from the origin of the force, is sufficient.

## 2. $F(x)$ , $v(x)$ , and $a(x)$ from $E_p(x)$

**2a.  $F(x)$  from Slope of  $E_p(x)$ .** The force on a particle is the negative of the rate at which the particle's potential energy is changing with position. On a graph of potential energy vs position, that is just the negative of the slope of the graph. Thus one can say that the force on a particle, currently passing through some particular point in space, is just

<sup>1</sup>We are here restricting our discussion to conservative, non-dissipative forces, ones that do not include friction.



**Figure 1.** An illustrative potential energy curve (see text).

the negative of the slope of that graph.

Characteristics of the force on a particle can be deduced from a graph of the particle's potential energy plotted as a function of position. Consider the potential energy curve in Fig. 1. One immediately notes that the particle with this potential energy is not moving freely. Rather, it feels a force which at each point is the negative of the slope of the  $E_p(x)$  curve. At all points for which  $x < x_0$  the slope of the curve is negative so the particle feels a positive force, one directed to the right. Furthermore, because the slope at  $x_1$  is steeper than at  $x_2$ , the magnitude of the force on the particle is greater at  $x_1$  than at  $x_2$ . The farther the particle gets away from  $x_0$ , the stronger the force exerted on it. At  $x_0$  the slope is zero so at this point the particle feels no force at all. At all points for which  $x > x_0$  the particle feels a negative force, one directed to the left. Note that the force on the particle is always directed back toward  $x_0$ , no matter which side of  $x_0$  the particle is on.

**2b.  $a(x)$  from Slope of  $E_p(x)$ .** Knowing how to deduce the force on a particle from its potential energy graph, one can then use Newton's second law to deduce the particle's acceleration at any particular point in space.

Imagine a particle moving along the  $x$ -axis in Fig. 1. Suppose the particle is first observed just to the right of  $x_0$ , traveling to the right. At this point the slope is positive and increasing as one moves to the right, so the force is to the left and becoming stronger as the particle moves along. Using  $F = ma$ , the increasingly negative force implies an increasingly negative acceleration. This increasingly negative (left-pointing) acceleration implies an increasingly strong rate of velocity reduction, an increasingly strong "slowing down" of the particle.

Now suppose the particle reverses its direction and travels left in the region to the right of  $x_0$ . The slope is still positive so the force is still negative, meaning the force is still to the left. However, since the particle is traveling to the left, the slope is becoming weaker (see the figure) so the left-pointing force is becoming weaker as  $x_0$  is approached. Then, by  $F = ma$ , the left-pointing acceleration, which increases the velocity toward the left, is becoming weaker as  $x_0$  is approached. At the instant  $x_0$  is passed, the slope is zero and hence the force and acceleration are zero.

**2c.  $v(x)$  from Conservation of Energy.** The velocity at any point  $x$ ,  $v(x)$ , can be obtained from  $E_p(x)$  by using the equation for conservation of energy,<sup>2</sup>

$$\frac{1}{2}mv(x_0)^2 + E_p(x_0) = \frac{1}{2}mv(x)^2 + E_p(x). \quad (1)$$

Equation (1) says that the total energy of the particle at point  $x_0$  equals the total energy of the particle at any other point,  $x$ . We rearrange Eq. (1) to get:

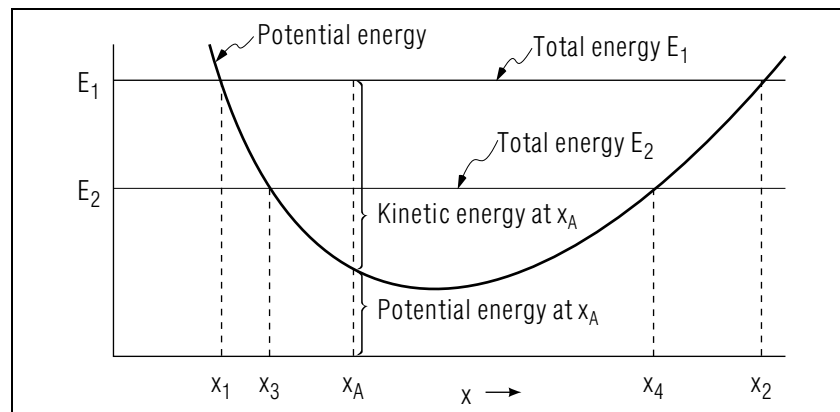
$$v(x)^2 = v(x_0)^2 + \frac{2}{m}(E_p(x_0) - E_p(x)) \quad (2)$$

and then take the square root of both sides to get  $v(x)$  as a function of  $E_p(x)$  and some constants.

### 3. Deductions From Graphical $E_p(x)$

**3a. Energy Diagrams.** If both total energy and potential energy are plotted as functions of position on the same graph, useful information about the motion of the particle may be determined from that diagram. The total energy, potential plus kinetic, is always a horizontal straight line on such a graph because the value of the total energy is independent of position. Figure 2 shows the potential energy curve of Fig. 1 with two different total energies superimposed on it. For a given total energy the particle's kinetic energy at each point  $x$  can be measured as the vertical distance between the potential energy at that point and the total energy. For example, with total energy  $E_1$ , the particle's kinetic energy, when it is at position  $x_A$ , is the indicated vertical distance shown on the graph. For a particle with total energy  $E_2$ , its potential energy at  $x_A$  would be the same as in the  $E_1$  case but its kinetic energy would be less.

<sup>2</sup>See "Potential Energy and Conservation of Energy" (MISN-0-415).



**Figure 2.** An energy diagram showing one potential energy and two total energy curves on the same graph (see text).

**3b. Changes in Speed.** Once the kinetic energy  $E_k$  is obtained from the energy diagram, the speed can be found:

$$v = \sqrt{2E_k/m}$$

However, the direction of the particle's velocity is ambiguous: the kinetic energy will match the given  $E_k$  whether the particle is moving to the right or to the left. However, the particle's change in kinetic energy, and hence its change in speed, does depend on its direction of motion. For example, if the particle in Fig. 2 is at  $x_A$  and is moving to the left, its kinetic energy is decreasing so its speed is decreasing. Such changes in speed, which depend on the particle's direction of motion, are given by the direction of its acceleration, the negative of the slope of its potential energy curve.

**3c. Turning Points.** There are often limits on the positions available to a particular particle: those limits are called "turning points" and they depend on the particle's potential energy function and on its total energy. For example: for a particle with the potential energy function shown in Fig. 2, and with total energy  $E_1$ , the particle can go no farther to the left than  $x_1$  and no farther to the right than  $x_2$ . Thus  $x_1$  and  $x_2$  are "turning points" for  $E_1$ .

Consider the situation in Fig. 2 with the particle at  $x_A$ , with total energy  $E_1$ , and moving left. As it moves left its kinetic energy decreases until the particle reaches  $x_1$  where its potential energy equals its total

energy. Since nothing is left for its kinetic energy, its velocity at this point is zero. However, the particle is only instantaneously at rest.

Throughout the neighborhood of  $x_1$  the force acts on the particle to the right, as can be seen from the negative slope of  $E_p$  in the neighborhood of  $x_1$ . As the particle approaches  $x_1$  from the right, going left, this force causes it to slow down, stop as it reaches  $x_1$ , then pick up speed to the right. Thus point  $x_1$  is truly a “turning point” of the motion: it is a point at which the particle stops and “turns around.” Similarly,  $x_2$  is a turning point on the right end of the motion: it is the point at which the particle moving to the right comes to a stop, then starts back left. These limits to the motion on the left and right are called the “left” and “right” turning points, respectively.

Note that for total energy  $E_2$  the turning points are  $x_3$  and  $x_4$ .

Now suppose the total energy line is lowered until it goes exactly through the minimum of the potential energy curve at point  $x_0$ : describe the particle’s motion for that case.<sup>3</sup>

#### 4. Dealing with $E_p(r)$

All of the results discussed in this module can be applied to three-dimensional cases that have spherical symmetry. This means cases where the force, potential energy, velocity, etc. depend only on the particle’s radius from the origin of coordinates (which is normally the origin of the force associated with  $E_p$ ). For such cases the one-dimensional position  $x$  is replaced by the radial position  $r$ . That means that  $E_p(r)$  is differentiated with respect to  $r$  to get  $F(r)$ , etc. The main difference from Cartesian coordinates is that negative values of  $r$  do not exist.

#### Acknowledgments

Preparation of this module was supported in part by the National Science Foundation, Division of Science Education Development and Research, through Grant #SED 74-20088 to Michigan State University.

---

<sup>3</sup>The answer is given in this module’s Glossary at the end of the Turning Point discussion.

### Glossary

- energy diagram: diagram consisting of the potential energy curve and a horizontal line representing the total energy of the particle.
- potential energy curve, potential energy graph: the graph of the potential energy of a particle as a function of position.
- turning points: positions at which a particle changes its direction of motion. These are positions on an energy vs position graph where the particle’s varying potential energy line crosses the particle’s horizontal total energy line. If, at some point, the potential energy line just touches the total energy line from above, then the left and right turning points coincide and no motion is possible.

## PROBLEM SUPPLEMENT

1. A particle traveling in a straight line has a potential energy function  $E_p(x) = 7x^2 - x^3$ , where the energy is in joules if the particle's position,  $x$ , is in meters. The slope of this function is:  $14x - 3x^2$ . The particle has a mass of 60 kg. Draw a rough sketch of  $E_p(x)$ . [R] At a certain instant the particle is at  $x = +1.0$  m with total energy  $E = 36$  joules and is moving to the right.
  - a. What is the kinetic energy of the particle at this point? [K]
  - b. What is its velocity? [N]
  - c. What is the instantaneous force this particle feels at this point? [E]
  - d. What is the acceleration (magnitude, direction) this particle undergoes? [I]
  - e. Therefore, is this particle's speed increasing or decreasing at this point? [P] Explain. [S]
  - f. With this particle moving to the right, and from the shape of the  $E_p$  curve in the vicinity of this point ( $x = 1.0$  m) determine whether the kinetic energy of the particle will increase or decrease. [C] Is this consistent with your answer to part (e)? [L]
  - g. For what value of  $x$  will the speed of this particle (moving to the right) be zero? (You may not actually be able to find the numerical value of  $x$  for which this occurs; however, if you do it right you'll have the equation satisfied by  $x$  at this point on the curve you've drawn.) [A]
  - h. At this point, where  $v = 0$ , what is the direction of the acceleration of the particle? (Get this from determining the sign of the force on the particle as determined from the slope of the curve.) [J] With this direction for the acceleration what is the direction of  $v$  an instant after the instant when  $v = 0$ , hence what is the direction of the subsequent motion of the particle? [O]
  - i. On your  $E_p(x)$  plot, show the region of those values of  $x$  forbidden to the particle when it has total energy  $E = 36$  joules. [G]
  - j. What are the turning points of the motion of the particle when its total energy is 36 joules? [Y]
  - k. If at point  $x = -3.0$  m a different particle of mass 60 kg starts out with speed  $v = 0$ :
    - (i) What is its kinetic energy? [D]
    - (ii) What is its potential energy? [T]
    - (iii) What is its total energy? [X]
    - (iv) What is the force (magnitude and direction) on the particle? [M]
    - (v) What is the magnitude of its acceleration? [V]
    - (vi) What is the direction of its acceleration? [B]
    - (vii) When it gets to  $x = 0$ , what is its speed? [H]
    - (viii) When it gets to  $x = (14/3)$  m, what is its speed? [U]
    - (ix) What is its acceleration (magnitude and direction) at  $x = (14/3)$  m? [Q]
    - (x) How far will it go before it turns around? [W]
    - (xi) Explain your answer to part (x). [F]

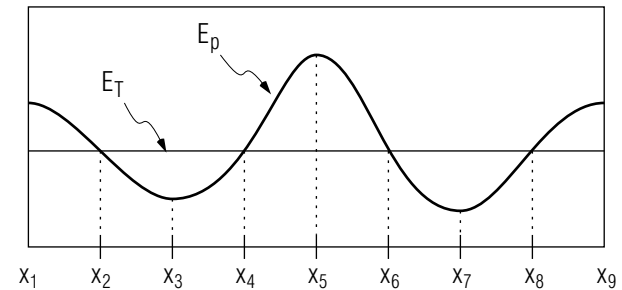
### Brief Answers:

- A. One of the solutions of  $x^3 - 7x^2 + 36 = 0$ . There are 3 solutions, call them  $x_1, x_2, x_3$  with  $x_1 < x_2 < x_3$  (refer to your graph, notice  $x_1$  is negative).  $x_2$  is the answer to this question. The actual values are  $x_1 = -2.0$  m,  $x_2 = 3.0$  m,  $x_3 = 6.0$  m (you can get this by plotting the graph, by trial and error, and/or by using a hand calculator).
- B. To right.
- C. Decreases.
- D. Zero.
- E.  $F_x = -11$  newtons (to left).
- F. After point  $x = (14/3)$  m, the potential energy continues to decrease to infinity, total energy remains constant, kinetic energy increases, never goes to zero, so  $v$  never changes direction.
- G. Forbidden regions:  $x < x_1$  and  $x_2 < x < x_3$ . All other regions are allowed. The above regions are forbidden because the particle would have a negative kinetic energy (not allowed;  $v^2$  cannot be negative) in these regions. Verify this from the energy diagram you've sketched.
- H.  $\sqrt{3}$  m/s.

- I.  $a_x = -(11/60) \text{ m/s}^2$  (to left).
- J. To left.
- K.  $E_k = 30 \text{ joules}$ .
- L. Yes, kinetic energy and speed both are decreasing.
- M. 69 newtons to right.
- N.  $v_x = +1.0 \text{ m/s}$ .
- O. Since  $a_x$  is to left; an instant after  $v_x = 0$ ,  $v_x$  is to the left.
- P. Decreasing.
- Q. Zero.
- R. A rough sketch of  $E_p(x)$  can be drawn by considering the following. For very large positive or negative values of  $x$ , the  $x^2$  term may be neglected compared to the  $x^3$  term. Hence, for very large negative values the curve tends to plus infinity while for very large positive values the curve goes to negative infinity. The curve crosses the  $x$ -axis whenever  $E_p(x)$  is zero. There are three roots to a cubic equation. In this case the roots are  $x = 0$  (twice) and  $x = 7.0 \text{ m}$ . You can also determine that the curve has a minimum at  $x = 0$  and a maximum at  $x = (14/3) \text{ m}$ . With this information a rough graph can be sketched.
- S.  $v_x$  is positive and  $a_x$  is negative, so  $v_x$  decreases.
- T. 90 joules.
- U.  $\sqrt{1.14(= 529/405)} \text{ m/s}$ .
- V.  $1.15 \text{ m/s}^2$ .
- W. To infinity.
- X. 90 joules.
- Y.  $x_1$  and  $x_2$ : using results of answer (A), the particle moves between points  $x = -2.0 \text{ m}$  and  $x = +3.0 \text{ m}$ .

## MODEL EXAM

- See Output Skill K1 in this module's *ID Sheet*.
- A particular particle has potential energy  $E_p$  and total energy  $E_T$ , as shown in the sketch below. It is known that at a particular instant of time the particle is at position  $x_3$ . Describe the motion of the particle, including turning points, if any, and regions of acceleration and deceleration.



- A particular particle of mass  $4.0 \text{ kg}$  travels in a straight line and has a potential energy of:  $2.0 - 4.0x + 4.0x^2$ , where the energy is in joules if the particle's position  $x$  is in meters. The slope of the potential energy function is:  $-4.0 + 8.0x$ . The particle has a total energy of:  $10.0 \text{ J}$ .
  - Sketch the particle's energy diagram ( $E_p$  and  $E_T$  vs.  $x$ ).
  - Find the particle's  $x$ -value at its right turning point.
  - Find the force on the particle at  $x = 2.0 \text{ m}$ .
  - Find the particle's speed at  $x = 1.0 \text{ m}$ .
  - Find the particle's acceleration at  $x = 0.50 \text{ m}$ .

**Brief Answers:**

1. See this module's *text*.
2.  $x_2$  to  $x_3$ : it speeds up  
 $x_3$  to  $x_4$ : it slows down  
 $x_4$ : it stops momentarily  
 $x_4$  to  $x_3$ : it speeds up  
 $x_3$  to  $x_2$ : it slows down  
 $x_2$ : it stops momentarily  
  
and the cycle repeats.
3. a. (you can check your sketch by measuring its slope at several points and checking those values against values you calculate from the slope formula given in the problem statement).  
b. 2.0 m.  
c.  $-1.2 \times 10$  N.  
d. 2.0 m/s  
e. 0.